

# Addition

Solve the below word problems.  
Show your working out.

There are

**35**



**3**

more join.

How many are there now?



$$\begin{array}{r} \square + \square \\ = \square \end{array}$$

There are

**14**



**12**

more join.

How many are there now?



$$\begin{array}{r} \square + \square \\ = \square \end{array}$$

There are

**18**



**16**

more join.

How many are there now?



$$\begin{array}{r} \square + \square \\ = \square \end{array}$$

There are

**26**



**7**

more join.

How many are there now?



$$\begin{array}{r} \square + \square \\ = \square \end{array}$$

Answers  
38, 26, 34, 33



graftoncentre.co.uk

the  
**grafton**

# Subtraction

Solve the below word problems.  
Show your working out.

There are

**26**



**8**

leave.

How many are  
there now?



$$\begin{array}{r} \square - \square \\ = \square \end{array}$$

There are

**13**



**3**

leave.

How many are  
there now?



$$\begin{array}{r} \square - \square \\ = \square \end{array}$$

There are

**37**



**22**

leave.

How many are  
there now?



$$\begin{array}{r} \square - \square \\ = \square \end{array}$$

There are

**19**



**5**

leave.

How many are  
there now?



$$\begin{array}{r} \square - \square \\ = \square \end{array}$$

Answers  
18, 10, 15, 14



graftoncentre.co.uk

the  
**grafton**

# Time

Can you tell us what time is shown on the clocks below?



The time is

\_\_\_\_\_ pm



The time is

\_\_\_\_\_ am



The time is

\_\_\_\_\_ am



The time is

\_\_\_\_\_ pm



The time is

\_\_\_\_\_ am



The time is

\_\_\_\_\_ pm



The time is

\_\_\_\_\_ am

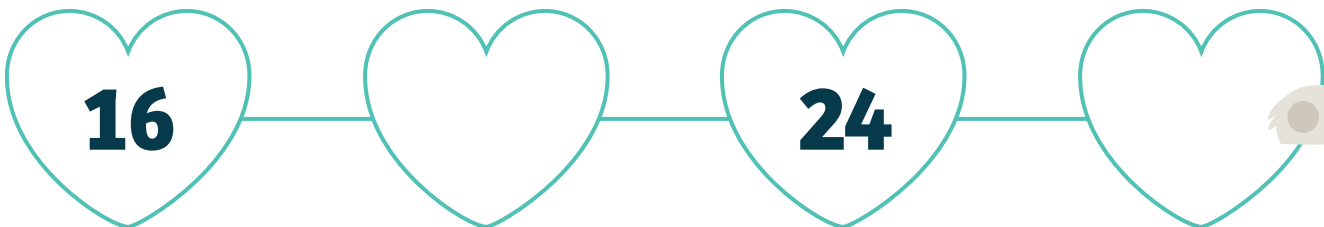
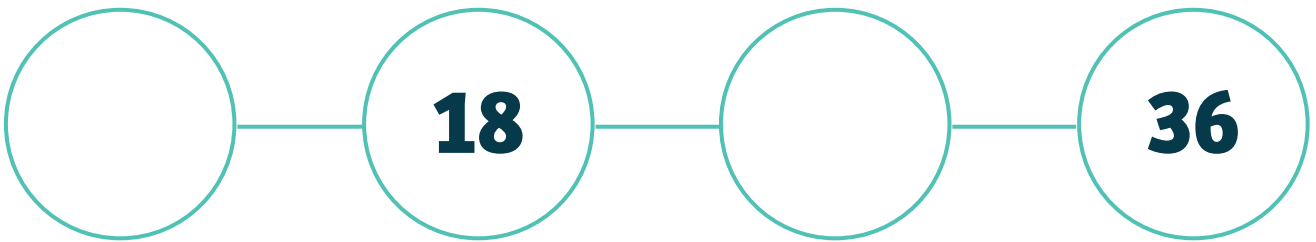
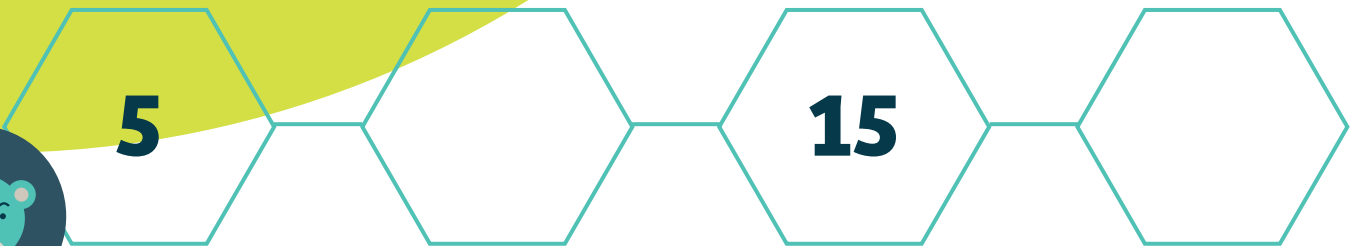


The time is

\_\_\_\_\_ pm

# Times Tables

Complete the pattern below using your times tables.



# Shapes

Can you tell us what shapes are below? How many sides do they have?

I am a \_\_\_\_\_  
and have \_\_\_\_\_ sides

I am a \_\_\_\_\_  
and have \_\_\_\_\_ sides

I am a \_\_\_\_\_  
and have \_\_\_\_\_ sides

I am a \_\_\_\_\_  
and have \_\_\_\_\_ sides

I am a \_\_\_\_\_  
and have \_\_\_\_\_ sides

